

Name: _____ () Class: P.2 ___ Date: _____

Unit 4 - The Use of Money
 WS(1) - Revision Worksheet

A. Jack is shopping. For each item, circle the fewest notes and coins needed.

1.




\$137.60



2.



\$83.20



B. Calculate the money Jack needs to pay for buying the following items.

1. Two shirts



\$	¢
○	
<div style="border: 1px solid black; width: 100%; height: 100%;"></div>	

2. A shirt
and a vase









\$	¢
○	
<div style="border: 1px solid black; width: 100%; height: 100%;"></div>	

Name: _____ () Class: P.2 ___ Date: _____

Unit 4 - The Use of Money

WS(2) - Activity Worksheet

A. Miss Chan is going to buy 2 soft toys for the school library. Which 2 toys do you like most? Circle them and set their prices.

		
\$ _____ . _____	\$ _____ . _____	\$ _____ . _____
		
\$ _____ . _____	\$ _____ . _____	\$ _____ . _____

B. Calculate and write the sum.

\$	¢
○	

Miss Chan has to pay \$ _____ . _____ for the 2 toys.

Name: _____ () Class: P.2 _____ Date: _____

Unit 4 - The Use of Money
WS(3) - Reflection Worksheet

1. Can the App 'Let's go shopping' help you practise addition and paying?
Circle the 👍 below to show your comment.



2. a) Number the pictures according to the sequence they appear on the App.



2. b) What CT (computational thinking) concept is included in such ordering?

- a. Conditionals
- b. Repetition
- c. Sequences
- d. Operators

3. Is it allowed to pay \$100 by using one hundred \$1 coins in the App?
What is the problem if you do so?

4. Besides addition and paying, what other Maths topics could be learnt and practised with the help of an App?
